



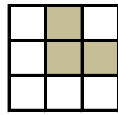

Tous pour le savoir et la réussite !

**TESTS T.O.S!**

**Consigne: A partir des images X et Y donnez les bonnes réponses des questions**

X

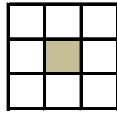
Y



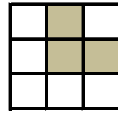
**1 Intersection des deux images**



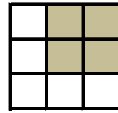
A,



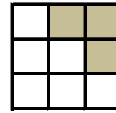
B,



C,




D,

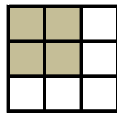


E,

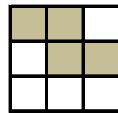
**2 L'union des deux images**



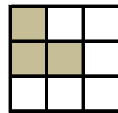
A,



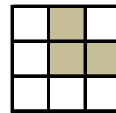
B,



C,



D,



E,

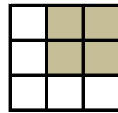
**3 Intersection des deux images tournée d'un quart de tour dans le sens anti horaire**




A,



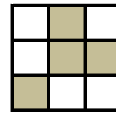
B,



C,




D,

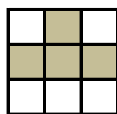


E,


**4 L'union des deux images tournée d'un quart de tour dans le sens anti horaire**



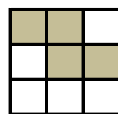
A,



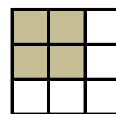
B,



C,




D,

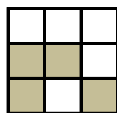


E,

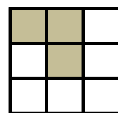
**5 Intersection des deux images tournée d'un quart de tour dans le sens horaire**



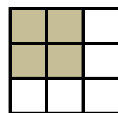
A,



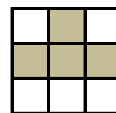
B,



C,




D,

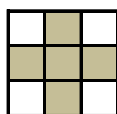


E,


**6 L'union des deux images tournée d'un quart de tour dans le sens horaire**



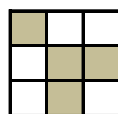
A,



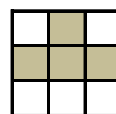
B,



C,



D,



E,



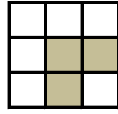
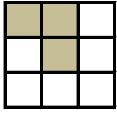
Tous pour le savoir et la réussite !

**TESTS T.O.S III**

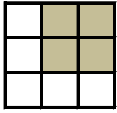
**Consigne: A partir des images X et Y donnez les bonnes réponses des questions**

X

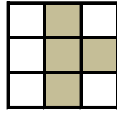
Y



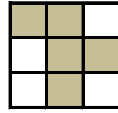
**1 Intersection des deux images**



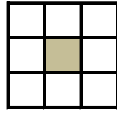
A,



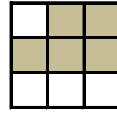
B,



C,




D,




E,

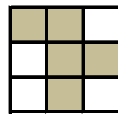
**2 L'union des deux images**



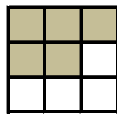
A,



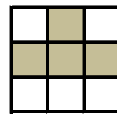
B,



C,




D,




E,

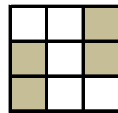
**3 Intersection des deux images tournée d'un quart de tour dans le sens anti horaire**



A,



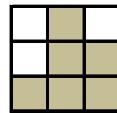
B,



C,




D,




E,


**4 L'union des deux images tournée d'un quart de tour dans le sens anti horaire**



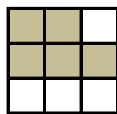
A,



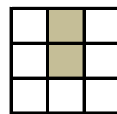
B,



C,




D,




E,

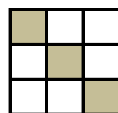
**5 Intersection des deux images tournée d'un quart de tour dans le sens horaire**



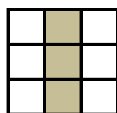
A,



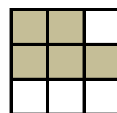
B,



C,




D,

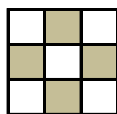


E,

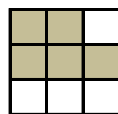
**6 L'union des deux images tournée d'un quart de tour dans le sens horaire**



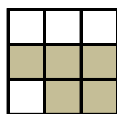
A,



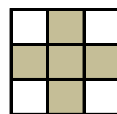
B,



C,



D,



E,



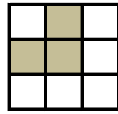
Tous pour le savoir et la réussite !

**TESTS T.O.S.V**

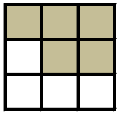
**Consigne: A partir des images X et Y donnez les bonnes réponses des questions**

X

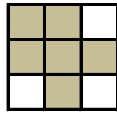
Y



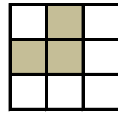
**1 Intersection des deux images**



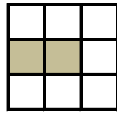
A,



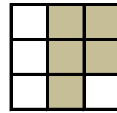
B,



C,

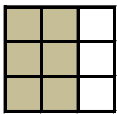


D,

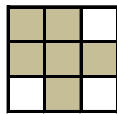


E,

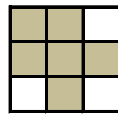
**2 L'union des deux images**



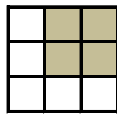
A,



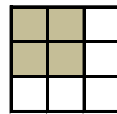
B,



C,




D,




E,

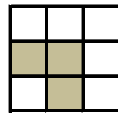
**3 Intersection des deux images tournée d'un quart de tour dans le sens anti horaire**



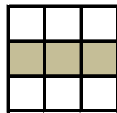
A,



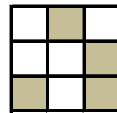
B,



C,




D,




E,

**4 L'union des deux images tournée d'un quart de tour dans le sens anti horaire**




A,



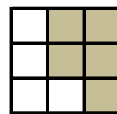
B,



C,




D,




E,

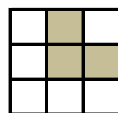
**5 Intersection des deux images tournée d'un quart de tour dans le sens horaire**




A,



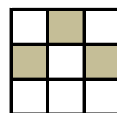
B,



C,




D,

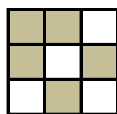


E,

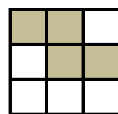
**6 L'union des deux images tournée d'un quart de tour dans le sens horaire**



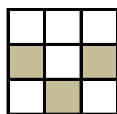
A,



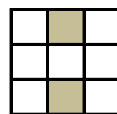
B,



C,



D,



E,



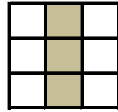

Tous pour le savoir et la réussite !

**TESTS T.O.S VII**


**Consigne: A partir des images X et Y donnez les bonnes réponses des questions**

X


Y



**1 Intersection des deux images**



A,



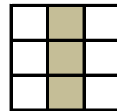
B,



C,




D,

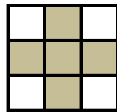


E,

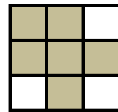
**2 L'union des deux images**



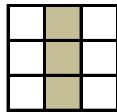
A,



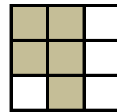
B,



C,

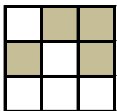


D,

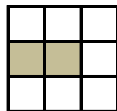


E,

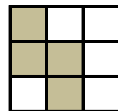
**3 Intersection des deux images tournée d'un quart de tour dans le sens anti horaire**



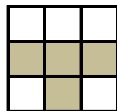
A,



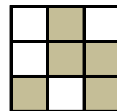
B,



C,

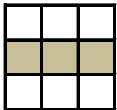


D,

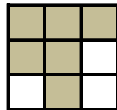


E,


**4 L'union des deux images tournée d'un quart de tour dans le sens anti horaire**



A,



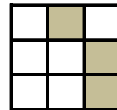
B,



C,




D,




E,

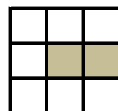
**5 Intersection des deux images tournée d'un quart de tour dans le sens horaire**



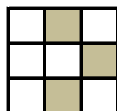
A,



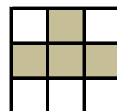
B,



C,

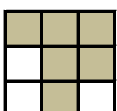


D,

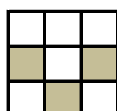


E,

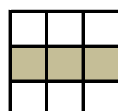
**6 L'union des deux images tournée d'un quart de tour dans le sens horaire**



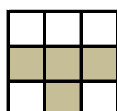
A,



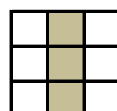
B,



C,



D,



E,




Tous pour le savoir et la réussite !

### TESTS T.O.S IX


**Consigne: A partir des images X et Y donnez les bonnes réponses des questions**

X


Y




#### 1 Intersection des deux images




A,



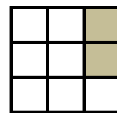
B,



C,




D,




E,


#### 2 L'union des deux images



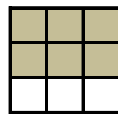
A,



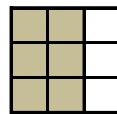
B,



C,

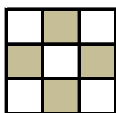


D,

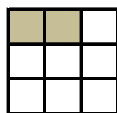


E,

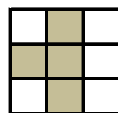
#### 3 Intersection des deux images tournée d'un quart de tour dans le sens anti horaire




A,



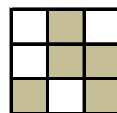
B,



C,




D,




E,

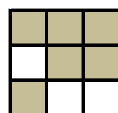
#### 4 L'union des deux images tournée d'un quart de tour dans le sens anti horaire




A,




B,



C,



D,

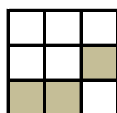


E,

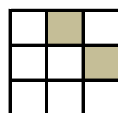
#### 5 Intersection des deux images tournée d'un quart de tour dans le sens horaire



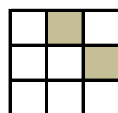
A,



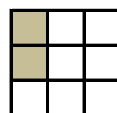
B,



C,




D,

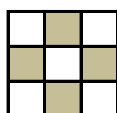


E,

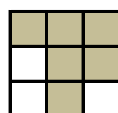
#### 6 L'union des deux images tournée d'un quart de tour dans le sens horaire



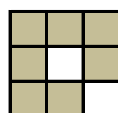
A,




B,



C,



D,



E,



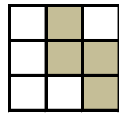

Tous pour le savoir et la réussite !

**TESTS T.O.S II**


**Consigne: A partir des images X et Y donnez les bonnes réponses des questions**

X

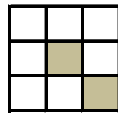
Y



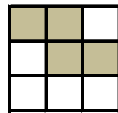
**1 Intersection des deux images**




A,



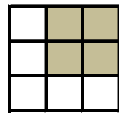
B,



C,




D,

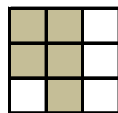


E,

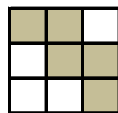
**2 L'union des deux images**



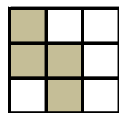
A,



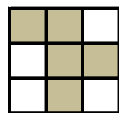
B,



C,



D,




E,

**3 Intersection des deux images tournée d'un quart de tour dans le sens anti horaire**



A,



B,



C,




D,




E,

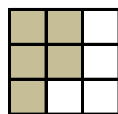
**4 L'union des deux images tournée d'un quart de tour dans le sens anti horaire**




A,




B,



C,




D,

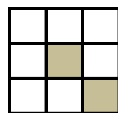


E,

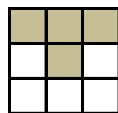
**5 Intersection des deux images tournée d'un quart de tour dans le sens horaire**



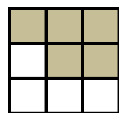
A,



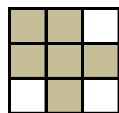
B,



C,




D,

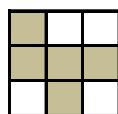


E,

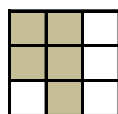
**6 L'union des deux images tournée d'un quart de tour dans le sens horaire**



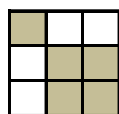
A,



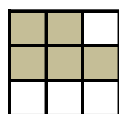
B,



C,



D,



E,



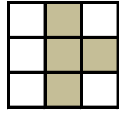
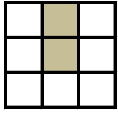
Tous pour le savoir et la réussite !

**TESTS T.O.S IV**

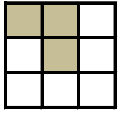
**Consigne: A partir des images X et Y donnez les bonnes réponses des questions**

X

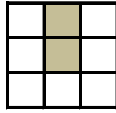
Y



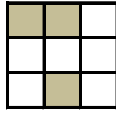
**1 Intersection des deux images**



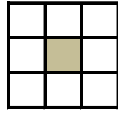
A,



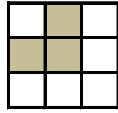
B,



C,

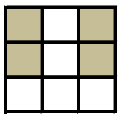


D,

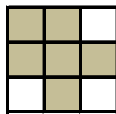


E,

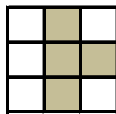
**2 L'union des deux images**



A,




B,



C,




D,

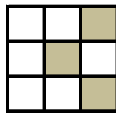


E,


**3 Intersection des deux images tournée d'un quart de tour dans le sens anti horaire**



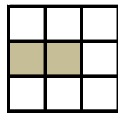
A,



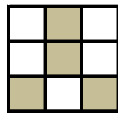
B,



C,




D,



E,


**4 L'union des deux images tournée d'un quart de tour dans le sens anti horaire**




A,



B,



C,




D,

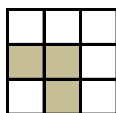


E,

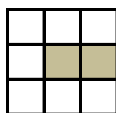
**5 Intersection des deux images tournée d'un quart de tour dans le sens horaire**



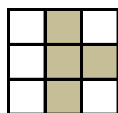
A,




B,



C,




D,

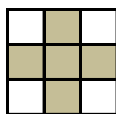


E,

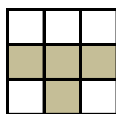
**6 L'union des deux images tournée d'un quart de tour dans le sens horaire**



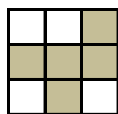
A,



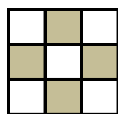
B,



C,



D,



E,



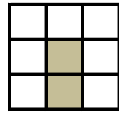

Tous pour le savoir et la réussite !

**TESTS T.O.S VI**

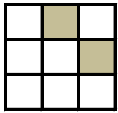
**Consigne: A partir des images X et Y donnez les bonnes réponses des questions**

**X**

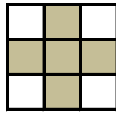
**Y**



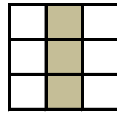
**1 Intersection des deux images**



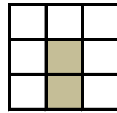
A,



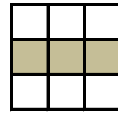
B,



C,

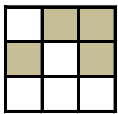


D,

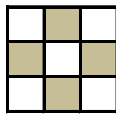


E,

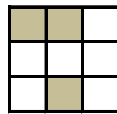
**2 L'union des deux images**



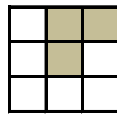
A,



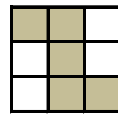
B,



C,




D,

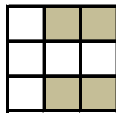


E,

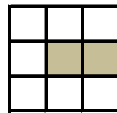
**3 Intersection des deux images tournée d'un quart de tour dans le sens anti horaire**



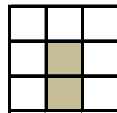
A,



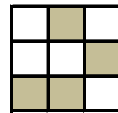
B,



C,




D,




E,

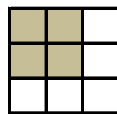
**4 L'union des deux images tournée d'un quart de tour dans le sens anti horaire**




A,



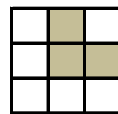
B,



C,




D,



E,

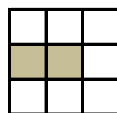
**5 Intersection des deux images tournée d'un quart de tour dans le sens horaire**




A,



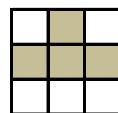
B,



C,

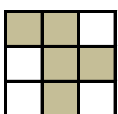


D,

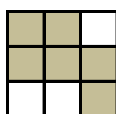


E,

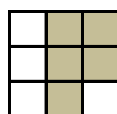
**6 L'union des deux images tournée d'un quart de tour dans le sens horaire**



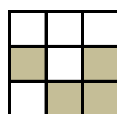
A,



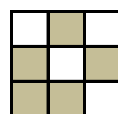
B,



C,



D,



E,





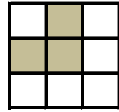
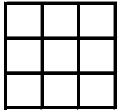
Tous pour le savoir et la réussite !

**TESTS T.O.S VIII**


**Consigne: A partir des images X et Y donnez les bonnes réponses des questions**

X

Y



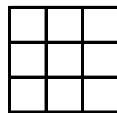
**1 Intersection des deux images**



A,



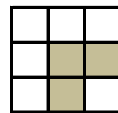
B,



C,




D,




E,


**2 L'union des deux images**



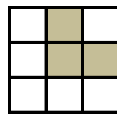
A,




B,



C,




D,

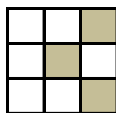


E,

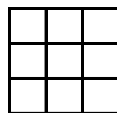
**3 Intersection des deux images tournée d'un quart de tour dans le sens anti horaire**



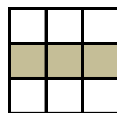
A,



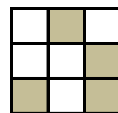
B,



C,

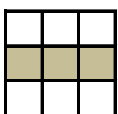


D,

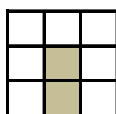


E,

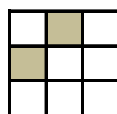
**4 L'union des deux images tournée d'un quart de tour dans le sens anti horaire**



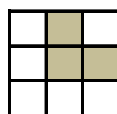
A,



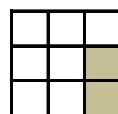
B,



C,




D,

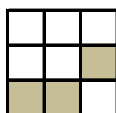


E,

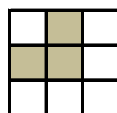
**5 Intersection des deux images tournée d'un quart de tour dans le sens horaire**



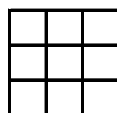
A,



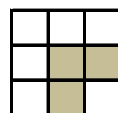
B,



C,

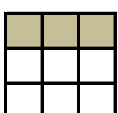


D,

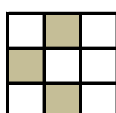


E,

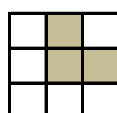
**6 L'union des deux images tournée d'un quart de tour dans le sens horaire**



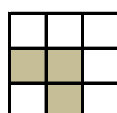
A,



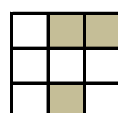
B,



C,



D,



E,





Tous pour le savoir et la réussite !

**TESTS T.O.S X**


**Consigne: A partir des images X et Y donnez les bonnes réponses des questions**

X


Y




**1 Intersection des deux images**



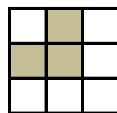
A,



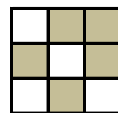
B,



C,




D,

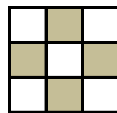


E,

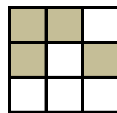
**2 L'union des deux images**



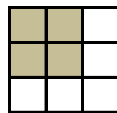
A,



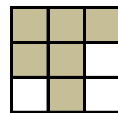
B,



C,




D,

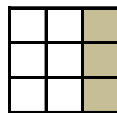


E,

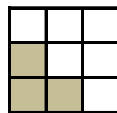
**3 Intersection des deux images tournée d'un quart de tour dans le sens anti horaire**



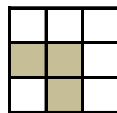
A,



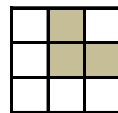
B,



C,




D,

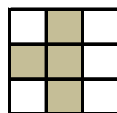


E,


**4 L'union des deux images tournée d'un quart de tour dans le sens anti horaire**



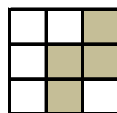
A,



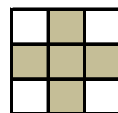
B,



C,

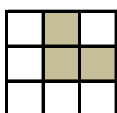


D,

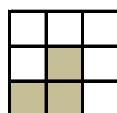


E,

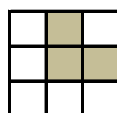
**5 Intersection des deux images tournée d'un quart de tour dans le sens horaire**



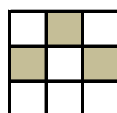
A,



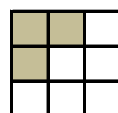
B,



C,




D,

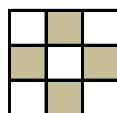


E,

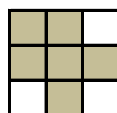
**6 L'union des deux images tournée d'un quart de tour dans le sens horaire**



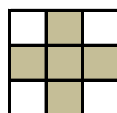
A,



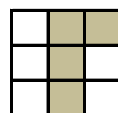
B,



C,



D,



E,